

## What's the Time?

### Introduction

This interactive puzzle activity helps students practice analog time, digital time, and time-phases.

### Before the Lesson

Print (A4 size), laminate, and cut out each puzzle piece (there are some dotted lines to indicate where to cut, but each puzzle square should be cut, and each puzzle piece, too). If you want to save cutting time, simply cut the clocks into squares and the written time into a rectangle. In lieu of laminating, print on thicker A4 cardstock paper. Be sure to print enough copies for the amount of students you have, *for example, if you have 15 students in class, print the pdf five times and group students into threes.*

### In the Lesson

Give each group of students a set of the time puzzles. They are to find the correct analog time that matches the digital time and then the time-phrase/written time that goes along with the clocks.

Once all of the groups have finished, you can extend the activity by having students make their simple sentences for what they do at certain times in the day. *Example: At 12 o'clock I eat lunch.*

Focus	Aim	Level	Time
Telling Time	To match analog and digital time.	A1	25 minutes



**03:00**

**three o'clock**



**07:00**

**seven o'clock**



**12:00**

**twelve o'clock**



**09:00**

**nine o'clock**



**10:00**

**ten o'clock**

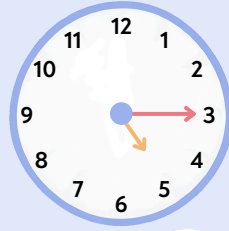


**04:00**

**four o'clock**



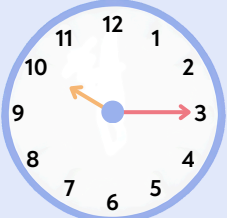
**02:15**



**05:15**

**a quarter past two**

**a quarter past five**



**10:15**



**06:15**

**a quarter past ten**

**a quarter past six**



**01:15**



**12:15**

**a quarter past one**

**a quarter past twelve**



**10:45**

**a quarter to eleven**



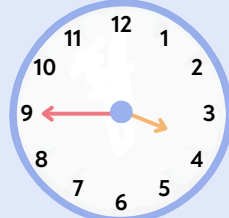
**02:45**

**a quarter to three**



**07:45**

**a quarter to eight**



**03:45**

**a quarter to four**



**08:45**

**a quarter to nine**



**01:45**

**a quarter to two**



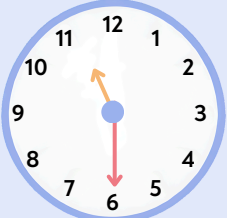
**06:30**

**half past six**



**12:30**

**half past twelve**



**11:30**

**half past eleven**



**05:30**

**half past five**



**07:30**

**half past seven**



**02:30**

**half past two**



**09:50**

**ten to ten**



**03:50**

**ten to four**



**08:50**

**ten to nine**



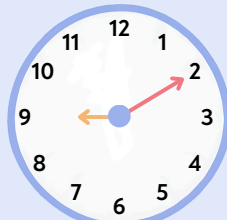
**04:10**

**ten past four**



**10:10**

**ten past ten**



**09:10**

**ten past nine**



**04:55**

**five to five**



**11:55**

**five to twelve**



**07:55**

**five to eight**



**05:05**

**five past five**



**01:05**

**five past one**



**11:05**

**five past eleven**



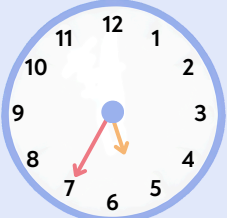
**02:25**



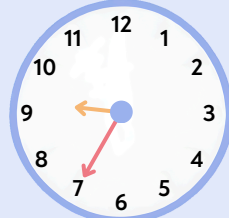
**01:25**

**twenty-five past two**

**twenty-five past one**



**05:35**



**09:35**

**twenty-five to six**

**twenty-five to ten**



**06:02**



**10:59**

**six-oh-two**

**ten fifty-nine**